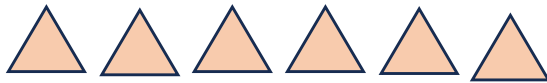



Subtract The Triangles

1.



=




Draw remaining Triangles Here

Answer

2.



=



Draw remaining Triangles Here

Answer

Subtract The Triangles

1.



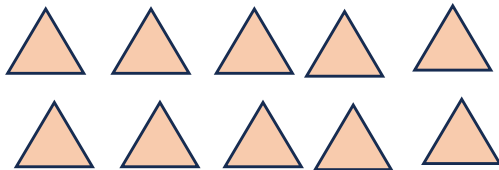
=




Draw remaining Triangles Here

Answer

2.



=

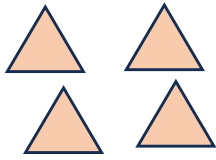


Draw remaining Triangles Here

Answer

Subtract The Triangles

1.



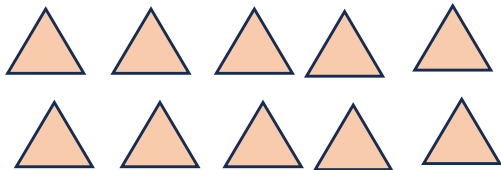
=




Draw remaining Triangles Here

Answer

2.



=

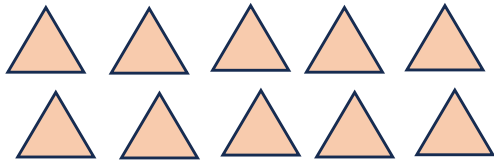


Draw remaining Triangles Here


Answer

Subtract The Triangles

1.



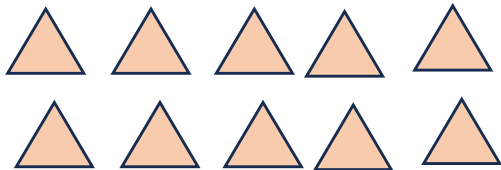
=




Draw remaining Triangles Here

Answer

2.



=

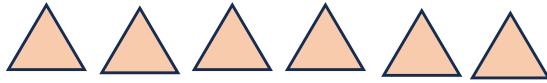


Draw remaining Triangles Here

Answer

Subtract The Triangles

1.



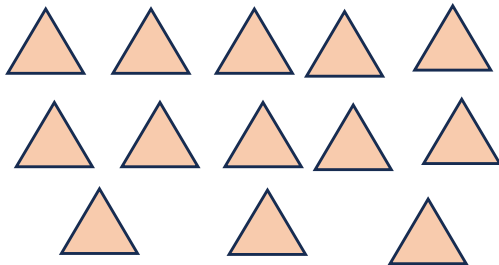
=

Draw remaining Triangles Here




Answer

2.



=

Draw remaining Triangles Here



Answer